

MISCELLANEOUS QUESTIONS

[SET – 9]

1. Merchant' is related to 'Trade' in the same way as 'Doctor' is related to:

- (a) Medicine (b) Prescription
(c) Healing (d) Examination

2. 'Fish' is related to 'Pisciculture' in the same way as 'Bees' is related to:

- (a) Horticulture (b) Apiculture
(c) Sericulture (d) Viticulture

3. Out of the four options given below, three are of a kind while one does not belong to the group. Choose the one which is unlike the others.

- (a) Circle : arc (b) TV : Screen
(c) Book : Cover (d) Laptop : Charger

4. What will come in place of the question mark in the following number series?

114 115 107 134 70 ?

- (a) 140 (b) 35 (c) 195 (d) 150

5. In a certain code, WORKABLE is written as VOYZPILD, how will BLUNDERS be written in same code?

- (a) CMVOEST (b) TSEOVMC
(c) YOFMWVIH (d) HIVWMFOY

6. Statements: All purses are mobile. All mobile are phones. Some mobile are rings. No ring is purse.

Conclusions :

- (a) Some purse is ring. (b) No mobile is ring.
(c) Some phones are purse. (d) All rings are mobile.

7. D, the son-in-law of B, is the brother-in-law of A who is the brother of C. How is A related to B?

- (a) Brother (b) Son (c) Father (d) None of these

8. There are seven persons A, B, C, D, E, F and G sitting in a line facing west. E is to the immediate right of G. B is at one of the extreme ends and has E as his neighbour. G is between E and F. C is sitting second from the south end. Who is sitting at the southern end?

- (a) A (b) B (c) C (d) E

9. A man starts walking towards Northeast diagonally from the left corner of a square plot and turns right after reaching the center of the plot. After some distance he again turns right and continues walking. Which direction is he facing now?

- (a) East (b) West (c) South (d) North

Direction (10 - 12): Study the following arrangement of the English alphabet and answer the questions given below.

U Q N K L D I M Y V B X P Z E O W T C F S J R H A G

10. Which letter is tenth to the right of the letter which is exactly the middle letter between U and W?

- (a) W (b) T (c) S (d) None of these

11. Four of the following five are alike in a certain way based on their position in the above arrangement and hence form a group. Which one does not belong to that group?

- (a) YIB (b) VXM (c) SCR (d) LNI

12. Vicky is cleverer than Puja. Tony is cleverer than Amit, but not more than Mumpi. Binoy is the cleverest of them all. If they are arranged in ascending order of cleverness, then who among the following will hold the middle position?

- (a) Vicky (b) Puja (c) Tony (d) Mumpi

13. If P means 'add to', V means 'multiply by', M means 'subtract from' and L means 'divide by' then

30 L 2 P 3 V 6 M 5 = ?

- (a) 18 (b) 28 (c) 31 (d) 103

14. Arrange the following words in a meaningful order

1. Tamil Nadu 2. Universe 3. Madurai

4. World 5. India

- (a) 3, 1, 4, 5, 2 (b) 1, 3, 5, 4, 2 (c) 3, 1, 5, 4, 2
(d) 3, 1, 2, 4, 5

15. Arrange the following words in a meaningful order

1. Rain 2. Monsoon 3. Rescue 4. Flood 5. Shelter

- (a) 1, 2, 3, 4, 5, (b) 1, 2, 4, 5, 3, (c) 2, 1, 4, 3, 5,
(d) 4, 1, 2, 3, 5,

16. In a certain coded language BAT is coded as 2012, BALL is coded as 121212. What will be the coded of BOWLER?

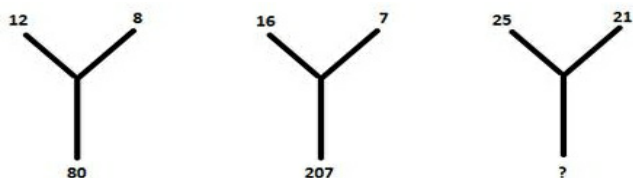
- (a) 1851223152 (b) 1815221352 (c) 95323152
(d) 185223152

17. Select the missing number from the given responses.

2	4	3	4	6	-2
1	8	2	24	-5	?

- (a) 45 (b) 60 (c) 70 (d) None of these

18. Find the missing figure:



- (a) 184 (b) 198 (c) 196 (d) 192

19. Statement: Stitch in time, saves nine.

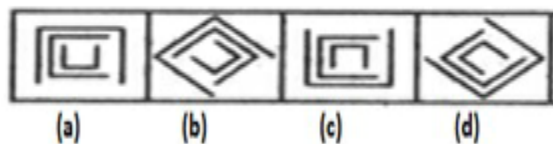
Conclusion:

I. The person who is punctual, always has some spare time.

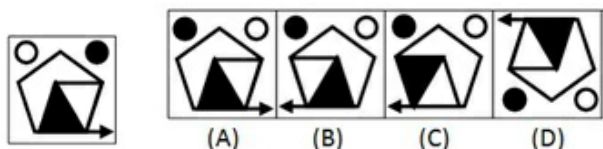
II. One should always plan a time-schedule for work.

- (a) I only (b) II only (c) Both I and II (d) Neither I nor II

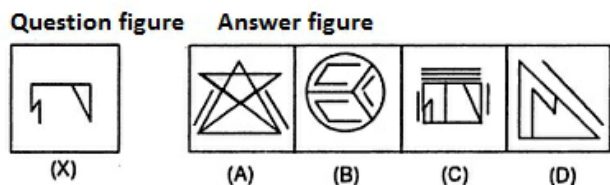
20. Out of the five given figures, four are similar in a certain way. One figure is not like the other four. Find out the figure which does not belong to the group, i.e., which does not share the common features/ characteristics with other four figures:



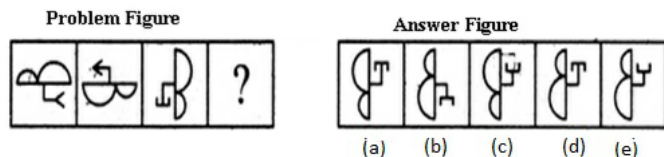
21. Choose the alternative which closely resembles the mirror image of the given figure:



22. Which image fits in the answer figure?



23. Which answer figure will replace the question mark?



24. In the following example, find the one which resembles the pattern formed when the transparent sheet, carrying a

design is folded along the dotted line along the direction shown by the arrow.

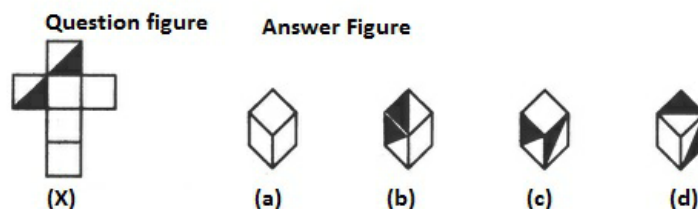
Question Figure



Answer Figure



25. Choose the box that is similar to the box formed from the given sheet of paper (X).



- (a) a and d only (b) c and d only
(c) a and b only (d) b and c only

26. If TULSIDAS is coded as SADISLUT then BEFORE is coded as

- (a) EROFEEB (b) ERFBEEO (c) EORFEB (d) EROFEB

27. If India is coded as 27924 and cricket is coded as 1621835 then DIRT will be coded as

- (a) 9878 (b) 9825 (c) 9165 (d) 9265

28. If 'Aman' = 4 'Shivam' = 6 'Science' = 7 Then 'Bhim' = ?

- (a) 3 (b) 4 (c) 5 (d) 6

29. Pritam walks 10 km towards North. From there, he walks 6 km towards South. Then, he walks 3 km towards East. How far and in which direction is he with reference to his starting point?

- (a) 5 km West (b) 5 km North-East
(c) 7 km East (d) 7 km West

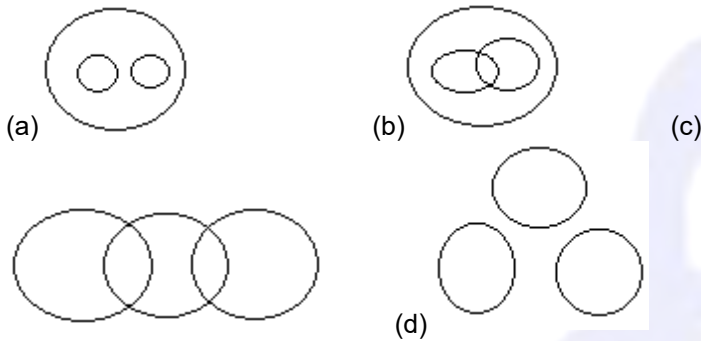
30. Akhil is the maternal uncle of Rashmi. Rashmi is the daughter of Ramesh. How is Ramesh related to Akhil?

- (a) Brother-in-law (b) Brother (c) Father (d) Cousin

31. If "A" denotes "added to", "B" denotes "divided by", "C" denotes "multiplied by" and "D" denotes "subtracted from", then $87 B 3 C 4 A 4 D 50 = ?$

- (a) 65 (b) 75 (c) 70 (d) 80

32. Identify the diagram that best represents the relationship among the given classes.
Animal, Human being, Lion



Directions (33-34) : Statements are given followed by two conclusions. You have to consider the statements to be true even if they seem to be at variance from commonly known facts. You have to decide which of the given conclusions, if any, follow from the given statements.

33. Statements: All M are D. No D is C. All C are G.
Conclusions: (i) Some G are D
(ii) All G are C

- (a) Conclusion I follows (b) Conclusion II follows
(c) Neither I nor II follows (d) Both I and II follow

34. Statements: Some K are R. Some R are A.
No D is A.
Conclusions: (I) Some D are R. (II) No D is R.

- (a) Conclusion I follows (b) Conclusion II follows
(c) Neither I nor II follows (d) either I or II follows

35. In a certain code language, '-' represents 'x', '+' represents '+', '÷' represents '÷' and 'x' represents '×'. Find out the answer to the following question
 $(47 \times 17) + 3 - 78 =$

- (a) 68 (b) 78 (c) 88 (d) 98

Direction (36-39) Select the related word/number from the given alternatives

36. 39 : 12 :: 47 :

- (a) 11 (b) 17 (c) 19 (d) 20

37. India : New Delhi :: China

- (a) Shanghai (b) Hong-cong (c) Beijing (d) Tibet

38. TRADE : SQZCD :: RULES :

- (a) QKTDR (b) QTDKR (c) QTKDR (d) QTDRK

39. 24 : 42 :: 18 : ?

- (a) 15 (b) 81 (c) 48 (d) 16

40. In an exam A, B, C and D each scored different mark. B scored more than C and D. No one scored less than A. Who amongst them scored the maximum marks?

- (a) B (b) C or D (c) D (d) Cannot be determined

Directions (41-44): Find out the odd word/ letters/ number/ number pair from the given alternatives.

41. (a) MLN (b) TSU (c) BAC (d) DEF

42. (a) Governor (b) President (c) MLA (d) MP

43. (a) 289 (b) 729 (c) 849 (d) 625

44. (a) proliferate (b) amplification (c) abate (d) burgeon

Directions (45-46): Select the missing number/letters from the given options.

45. 5, 9, 14, 20, ?

- (a) 25 (b) 26 (c) 27 (d) 28

46. UVX, ABD, GHJ, MNP, ?

- (a) RSU (b) STV (c) QRT (d) STU

47. The age of Rakesh is thrice the age of Manti. If the age of Manti is a prime number and the Rakesh's age is in between 25 and 36. What would be their ages?

- (a) 25, 7 (b) 8, 24 (c) 9, 27 (d) 11, 33

48. In a certain code language "feel free to fly" = "4l 4e 2o 3y". "Why the statement" = "3y 3e 9t" then "Media" is coded as

- (a) 5m (b) 5e (c) 5a (d) 4a

49. In a certain code language, "FRIED" is written as "EQHDC". How is "RUSTY" written in that code language?

- (a) PAXYZ (b) QTRSX (c) PARSX (d) NQVSZ

50. Arrange the given words in the sequence in which they occur in the dictionary

- (i) NOTIFICATION (ii) NOTE (iii) NOTICE
(iv) NOTHING

- (a) ii, iv, i, iii (b) ii, iv, iii, i (c) iv, ii, iii, i (d) i, ii, iii, iv