

IMPORTANT QUESTIONS ON MIRROR IMAGE

&

WATER IMAGE

GEORGE SCHOOL OF COMPETITIVE EXAM

Q1. Choose the alternative which is closely resembles the water image of the given combination

I ! L I I ! U I I Y ! 1 I

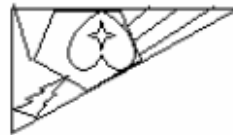
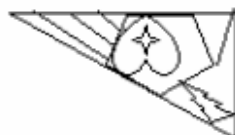
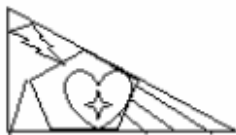
A. I I I I I I I I I I I I I I I I

B. I I I I I I I I I I I I I I I I

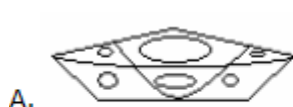
C. I ! L I I ! U I I Y ! 1 I

D. None of these

Q2. Choose the alternative which is closely resembles the water image of the given combination.



Q3. Choose the alternative which is closely resembles the water image of the given combination.



D. None of these.

Q4. Choose the alternative which is closely resembles the water image of the given combination



- A. B. C. D.

Q5. Choose the alternative which is closely resembles the water image of the given combination.

NONVERBAL REA

- a. **NONVERBAL REA**
b. **NONVERBAL REA**
c. **NONVERBAL REA**
d. **NONVERBAL REA**

Q6. Choose the alternative which is closely resembles the water image of the given combination.

COMMUNMOC

- A. **COMMUNMOC**
B. **COMMUNMOC**
C. **COMMUNMOC**
D. **COMMUNMOC**

Q7. Choose the alternative which is closely resembles the water image of the given combination.

S1MULTANEOUS

- A. S1MULANEUOS
- B. 21WUFLANEON2
- C. 21WUFLANEON2
- D. 2UO3NATJUMI2

Q8. Choose the alternative which is closely resembles the water image of the given combination.

INST1TUR3I

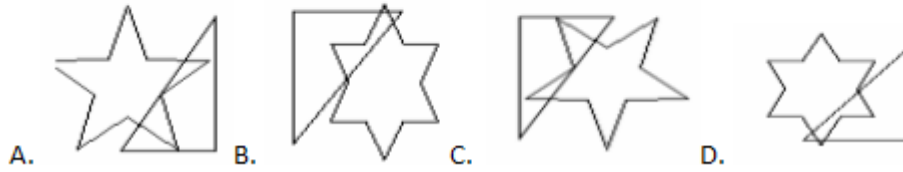
- A. I1N2111083I
- B. IERUTIT2NI
- C. IERUTIT2NI
- D. IERUTIT2NI

Q9. Choose the alternative which is closely resembles the water image of the given combination.

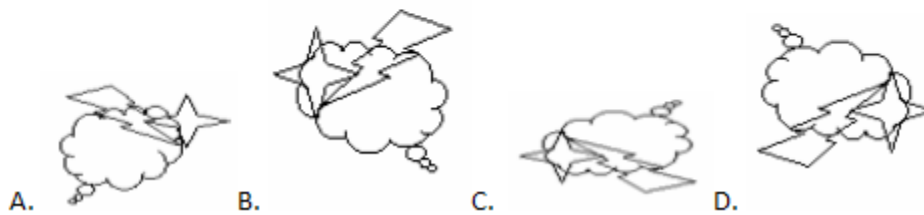


- A.
- B.
- C.
- D.

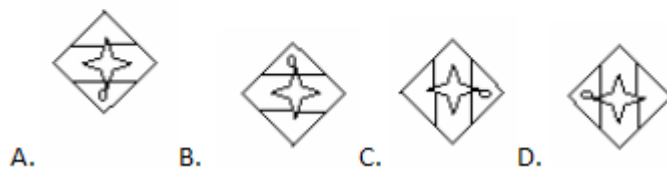
Q10. Choose the alternative which is closely resembles the water image of the given combination.



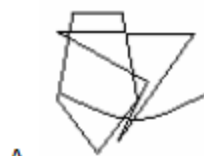
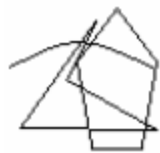
Q11. Choose the alternative which is closely resembles the water image of the given combination.



Q12. Choose the alternative which is closely resembles the water image of the given combination.



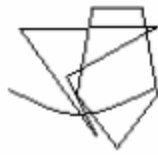
Q13. Choose the alternative which is closely resembles the water image of the given combination.



A.



B.



C.

D. None of these

Q14. Choose the alternative which is closely resembles the water image of the given combination.



A.



B.



C.

D. None of these

Q15. which of the answer figures is exactly the mirror image of the given question figure when the mirror is held at XY?

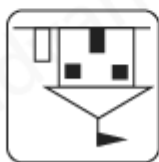
Question figure:



Answer figures:



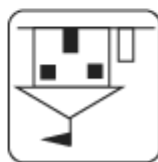
(1)



(2)



(3)



(4)

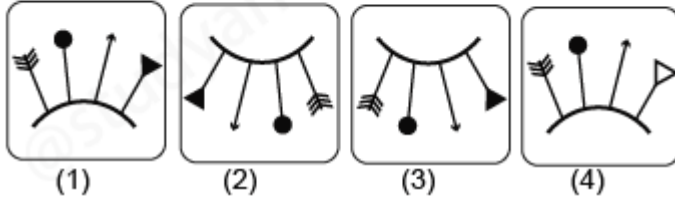
- A) 2
- B) 4
- C) 3
- D) 1

Q16. When the mirror is held at XY, find the exact mirror image of the given question figure from the answer figures?

Question figure:



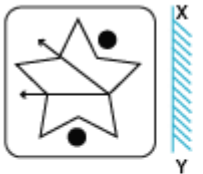
Answer figures:



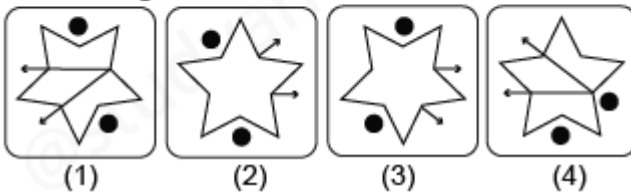
- A) 2
- B) 4
- C) 3
- D) 1

Q17. If the mirror is placed on the line XY, then identify the correct mirror image of the given question figure from the answer figures.

Question figure:



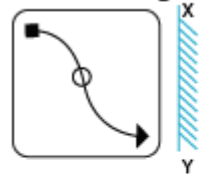
Answer figures:



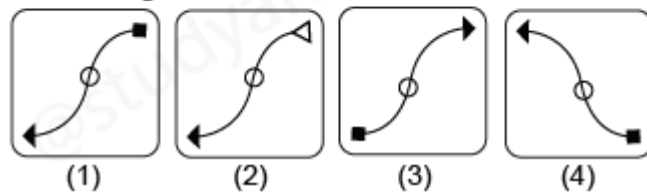
- A) 2
- B) 4
- C) 3
- D) 1

Q18. Which of the answer figures is exactly the mirror image of the given question figure when the mirror is held at XY?

Question figure:



Answer figures:



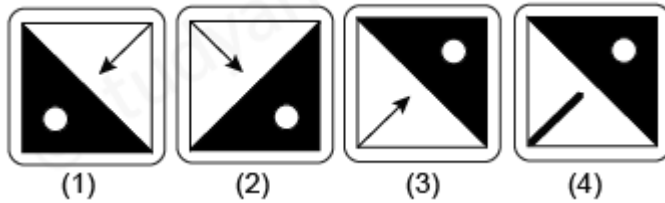
- A) 2
- B) 4
- C) 3
- D) 1

Q19. When the mirror is held at XY, find the exact mirror image of the given question figure from the answer figures?

Question figure:



Answer figures:



A) 2

B) 4

C) 3

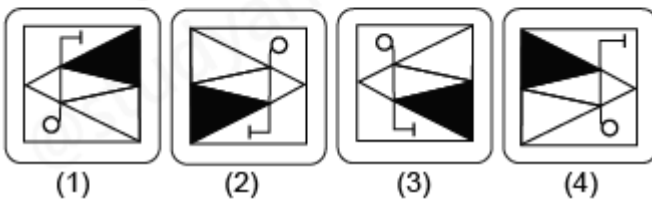
D) 1

Q20. Which of the answer figures is exactly the mirror image of the given question figure when the mirror is held at XY?

Question figure:



Answer figures:



A) 2

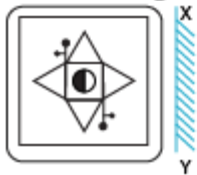
B) 4

C) 3

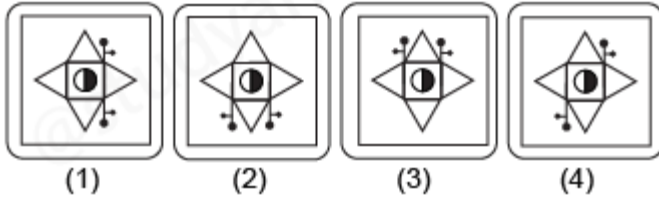
D) 1

Q21. Which of the answer figures is exactly the mirror image of the given question figure when the mirror is held at XY?

Question figure:



Answer figures:



A) 2

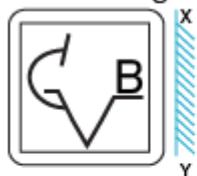
B) 4

C) 3

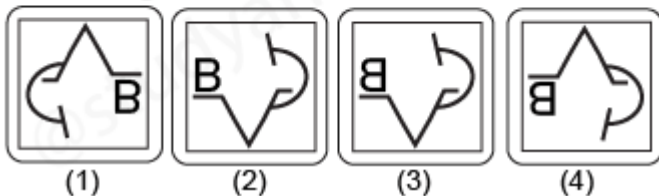
D) 1

Q22. When the mirror is held at XY, find the exact mirror image of the given question figure from the answer figures?

Question figure:



Answer figures:



A) 2

B) 4

C) 3

D) 1

Q23. When the mirror is held at XY, find the exact mirror image of the given question figure from the answer figures?

Question figure:



Answer figures:



A) 2

- B) 4
- C) 3
- D) 1

Q24. Choose the alternative which is closely resembles the mirror image of the given combination.

ANS43Q12

- (1) AN24EQ1S (2) S1Q342NA
- (3) 2NA34Q51 (4) 15Q43AN2

- A) 1
- B) 2
- C) 3
- D) 4

Q25. Choose the alternative which is closely resembles the mirror image of the given combination.

DL9CG4728

- (1) DJ8CG4758 (2) 8574GCGJD
- (3) 8574GCGJD (4) DJ8CG4758

- A) 1
- B) 2
- C) 3
- D) 4