

# MISCELLANEOUS QUESTIONS

[SET – 27]

1. Direction : There are three statements which are followed by three conclusions. Choose the conclusion which logically follow/follows from the given statements  
Statements: Money plays a vital role in politics.

Conclusions: I. The poor can never become politicians.  
II. All the rich men take part in politics.

- (a) Only conclusion I follows (b) Only conclusion II follows  
(c) Either I or II follows (d) Neither I nor II follows

2. Pointing to a man in a photograph, Isha said. "His father's only son is my father". How is Isha related to that Man?

- (a) Sister (b) Niece (c) Mother (d) Daughter

3. If in a certain language, COMPUTER is coded as 24681973. How is ROTER coded in that language?

- (a) 3 7 6 8 9 (b) 3 9 4 3 7 (c) 3 4 9 7 3 (d) 3 6 8 3 4

4. Insert the missing character depicted by ?


4	8	5
3	2	3
5	4	5
17	20	?

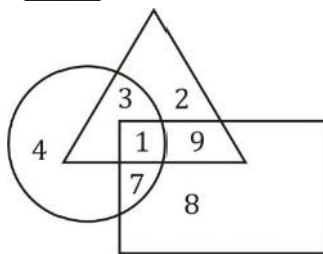
- (a) 15 (b) 20 (c) 42 (d) 12

Direction [5 – 7]: Study the following figures and answer the questions given below.

 Trained Sports person

 Married Population

 Sports person in college



5. By which number, the untrained married sportsperson in the college are represented?

- (a) 1 (b) 3 (c) 7 (d) 9

6. What is represented by the number '9' ?

- (a) Married sportsperson in the college.

- (b) Trained sportsperson  
(c) Unmarried trained sportsperson  
(d) Married trained sportspersons

7. By which number, the trained unmarried sportsperson in the college are represented.

- (a) 2 (b) 3 (c) 7 (d) 9

8. Statements: Water supply in wards A and B of the city will be affected by about 50% on Friday because repairing work of the main lines is to be carried out.

Conclusions: I. The residents in these wards should economies on water on Friday.

II. The residents in these wards should store some water on the previous day.

- (a) Only conclusion I follows (b) Only conclusion II follows  
(c) Either I or II follows (d) Both I and II follow

9. Four pairs are given below out of which three are alike in some manner and one is different. Which is different from the rest?

- (a) Wood : Rails (b) Bronze : Statue  
(c) Steel : Utensils (d) Duralumin : Aircraft

10. Each question consist of two words which have a certain relationship to each other followed by four pairs of related words, Select the pair which has the same relationship.

SYMPHONY: COMPOSER

- (a) Leonardo : music (b) Fresco : painter  
(c) Colours : pallet (d) Art : appreciation

11. How is Ravi related to the daughter of only daughter-in-law of wife of Ravi's father.

- (a) Husband (b) Son (c) Father (d) Grand Father

12. Statement: All the organized persons find time for rest. Sunita, inspire of her very busy schedule, finds time for rest.

Conclusion: I. Sunita is an organized person  
II. Sunita is an Industrious person

- (a) If only conclusion I follows  
(b) If only conclusion II follows  
(c) If neither I nor II follows  
(d) If both I and II follow

13. Which of the following does NOT belong to this group?

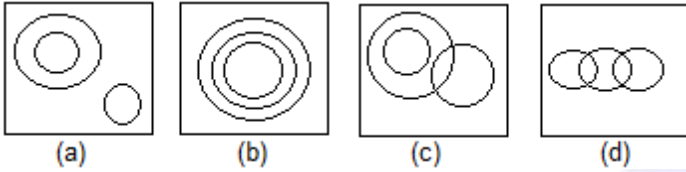
- (a) Notebook (b) Pen (c) Scale (d) Principal

14. P, Q, R, S are playing carrom sitting in clockwise direction. If R is facing North. What direction is Q facing.

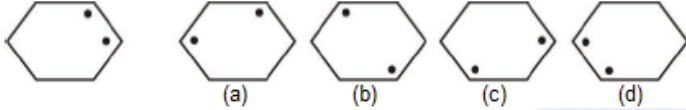
- (a) East (b) West (c) North (d) South

15. Choose the best suitable venn diagram for the following words:

Rabbit, Tomato, Animals

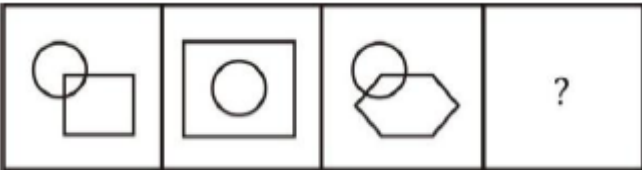


16. Select the pattern from the given options that resembles closest to :

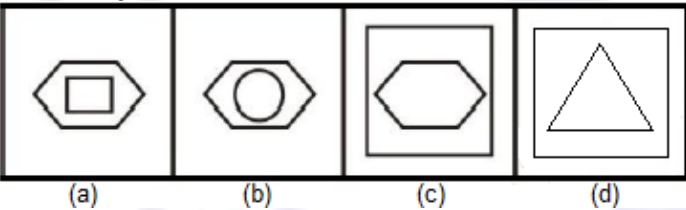


17. Which answer figure will come next in the given problem figure series?

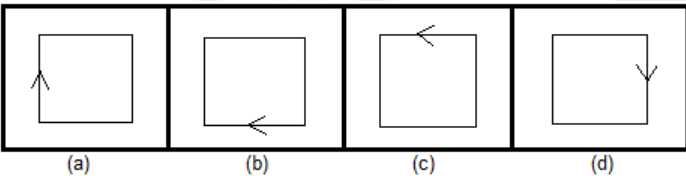
Problem Figures :



Answer Figures :



18. Find the odd one out.



19. Statement : The State Government has decided to declare "Kala Azar" as a notifiable disease under the Epidemics Act, 1987 . Family members or neighbors of the patient are liable to be punished in case they do not inform the state authorities.

Courses of Action :

I) Efforts should be made to effectively implement the Act.  
 II) The cases of punishment should be propagated through mass media so that more people become aware of the stern action.

- (a) if only I follows                      (b) if only II follows  
 (c) if neither I nor II follows        (d) if both I and II follow

20. Statement : Every year, at the beginning or at the end of the monsoons, we have some cases of conjunctivitis, but this year it seems to be a major epidemic witnessed after

nearly four years.

Courses of Action :

I) Precautionary measures should be taken after every four years to check this epidemic.

II) People should be advised to drink boiled water during winter season.

- (a) if only I follows                      (b) if only II follows  
 (c) if neither I nor II follows        (d) if both I and II follow

21. 7th of April 2014 is a Monday. What day would be 14 August 2014?

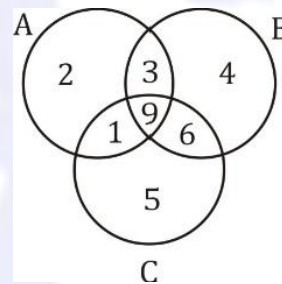
- (a) Wednesday    (b) Friday    (c) Thursday    (d) Monday

22. In the following question select the related word from the given alternative?

GATES : JDWHV :: LINUX :

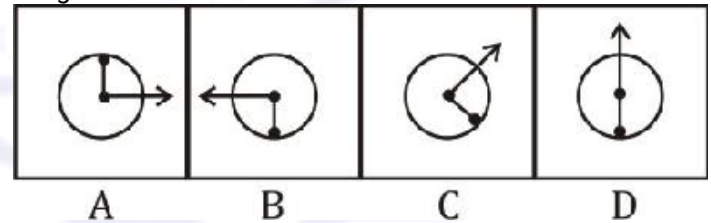
- (a) OLQXA    (b) OLQVZ    (c) NKQXA    (d) NKQVZ

23. The given Venn diagram represents the sports preference of a group of school students. There are three games : A-Hockey, B-Cricket, C- Squash. How many student play at least one game?



- (a) 15    (b) 21    (c) 30    (d) 25

24. Choose the figure which is different from the others in the given set.



25. Which of the following correctly represents the relationship between Eyes, Forehead, Face

